
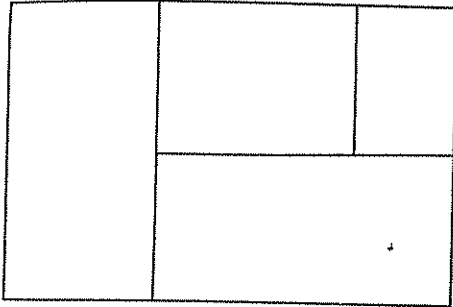


LESSON
6-6

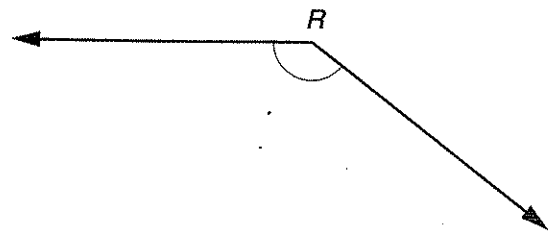
Math Boxes



1. Write the correct fraction in each of the smaller regions of the figure below. Check to see that the fractional parts add up to 1.



2.



Estimate of the measure of $\angle R$: _____

The measure of $\angle R$ is about _____.



3. Here are the results of Jay's last 11 science tests:

13, 3, 11, 19, 11, 16, 11, 17, 15, 12, 15

- What is the mean of his scores? _____
- What is the median of his scores? _____
- What is the mode of his scores? _____



4. Measure each to the nearest centimeter.

a. *Student Reference Book*

length: _____ cm width: _____ cm

b. seat of chair

length: _____ cm width: _____ cm

c. sole of shoe length: _____ cm

width: _____ cm



5. Measure each line segment to the nearest $\frac{1}{8}$ inch.

a. _____

b. _____



6. Write each fraction as a mixed number or a whole number.

a. $\frac{39}{4} =$ _____

b. $\frac{62}{7} =$ _____

c. $\frac{45}{6} =$ _____

d. $\frac{200}{5} =$ _____

e. $\frac{83}{9} =$ _____

