


LESSON
8-3

Math Boxes




1. Make a circle graph of the survey results.

Time Spent on Homework

Time	Percent of Students
0–29 minutes	25%
30–59 minutes	48%
60–89 minutes	10%
90–119 minutes	12%
2 hours or more	5%

_____ title _____



2. Write each numeral in number-and-word notation.

- a. 56,000,000 _____
- b. 423,000 _____
- c. 18,000,000,000 _____
- d. 9,500,000 _____



3. True or False? Write T or F.

- a. All rectangles are parallelograms. _____
- b. A kite is not a parallelogram. _____
- c. Some parallelograms are squares. _____
- d. Some trapezoids are not quadrangles. _____



4. Complete the “What’s My Rule?” table and state the rule.

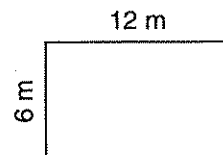
Rule _____

in	out
48	
40	5
1	$\frac{1}{8}$
	0
16	2



5. Find the area of the rectangle.

$$\text{Area} = b * h$$



Area: _____
(unit)

