


LESSON
4.4
Math Boxes


1. Write $<$ or $>$.

a. $\frac{3}{5}$ _____ 0.70

b. $\frac{1}{4}$ _____ 0.21

c. 0.38 _____ $\frac{3}{10}$

d. 0.6 _____ $\frac{2}{3}$

e. 0.95 _____ $\frac{9}{100}$



2. Jamie bikes 18.5 mi per day. How many miles will she ride in 13 days?

Open sentence: _____

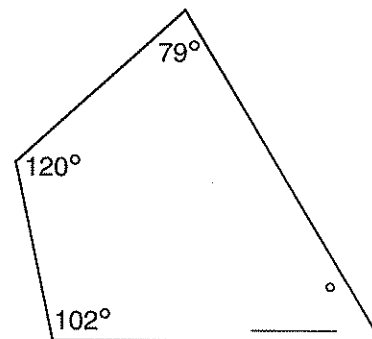
Solution: _____

Answer: _____

3. Write the prime factorization of 132.



4. Without using a protractor, find the measurement of the missing angle.



5. Solve.

a. $2.03 - 0.76 =$ _____

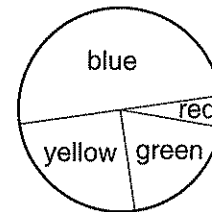
b. _____ $= 57.97 + 3.03$

c. _____ $= 691.23 + 507.26$

d. $29.05 + 103.94 =$ _____



6. Fill in the circle next to the best answer.

Favorite 5th Grade Colors


- A. More than $\frac{1}{2}$ of the students chose blue.
- B. 50% of the students chose yellow or green.
- C. More than 25% of the students chose yellow or red.

